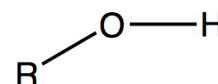
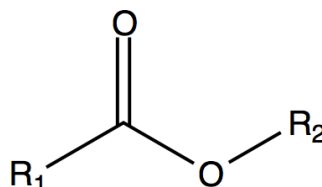
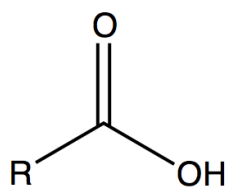
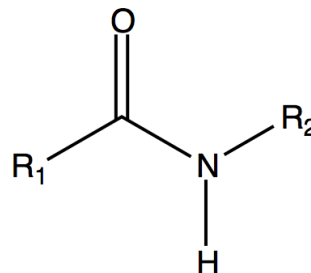
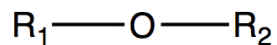


NAME: _____

January 15, 2013

Label each of the following chemical functionalities with the appropriate name:



NAME: _____

January 15, 2013

Label each of the following chemical functionalities with the appropriate name:

